



DELHI PUBLIC SCHOOL RAMPURHAT

MID-TERM EXAMINATION

SESSION: 2024-2025

SUBJECT: ENGLISH

CLASS – III

Time Allowed: 2 Hrs 15 Mins

Max. Marks: 50

General Instructions:

- (i) First 15 minutes are allowed only for reading the question paper. Students must NOT start writing during this time.
- (ii) This question paper consists of 3 printed pages.

Section A- Reading

1. Read the passage below and answer the following questions: (1X4=4)

Healthy Food

Healthy foods are important for our bodies to grow strong and stay healthy. Fruits and vegetables are some of the healthiest foods we can eat. They come in many different colors and flavors. Apples, oranges, carrots, and broccoli are just a few examples of these nutritious foods.

They are packed with vitamins and minerals that help us stay energized and keep our immune system strong.

Eating healthy foods also helps us have strong bones and teeth. So, next time you're hungry, reach for a delicious and nutritious fruit or vegetable!

Questions

- a) Why are healthy foods important?
- b) What do fruits and vegetables provide us?
- c) How do healthy foods help our bodies?
- d) Give some examples of healthy food.

2. Read the poem below and answer the following questions: (1x6=6)

I Eat Spaghetti with a Spoon

I eat spaghetti with a spoon.
For soup, I use a fork.
I drink my soda from a bottle
stopped up with a cork.

I have a pair of chopsticks
that I use for cutting cheese,
a spatula for salads,
and a knife for eating peas:

I drink my pizza from a cup.
eat ice cream with a stick,
and when I want a glass of milk
my strainer does the trick.

I slurp salami through a straw.
I don't get too much in.
But that's the way I always stay
so fabulously thin.

- Kenn Nesbitt

Questions:

- a) How many stanzas does this poem have?
- b) In the second stanza, which word rhymes with peas?
- c) What does he use to eat his soup?
- d) What does he drink from a cup?
- e) How does he eat his ice cream?
- f) What does he slurp through a straw?

Section B- Grammar and Writing

3. Attempt any one letter from the following. (5x1=5)

- a) Write a letter to your friend sharing your upcoming Durga Puja vacation plan.
- b) Write a letter to your cousin inviting him/her to your birthday celebration.

4. Fill in the blanks with the appropriate prepositions: (1x3=3)

- a) We go _____ school every day. (to/at/in)
- b) The plane flew _____ the building. (on/at/over)
- c) There is a signboard _____ the roadside. (in/by/under)

5. Complete the sentences. Use the possessive 's or of. (1x2=2)

- a) The _____ (capital/ France) is Paris.
- b) My _____ (sister/ phone) is white.

6. Complete the sentences with the superlative/comparative form of the adjectives given. (1x2=2)

- a) They say Crete is _____ than any other island in Greece. (beautiful)
- b) Summer is _____ season of the year. (hot)

- 7. Choose the correct adverbs of manner to fill in the blanks:** (1x2=2)
- a) She studied _____ (sincerely/bravely) before the examination.
b) You should speak _____ (carelessly/politely).

- 8. Fill in the blanks using suitable adverb of frequency from the box:** (1x3=3)

Help Box: once, usually, rarely, often

- a) It is _____ hot in summer.
a) I _____ drink tea.
b) She makes egg roll _____ in a week.

- 9. Choose the correct answer:** (1x2=2)

- a) The bags on the floor are us/ours.
b) Her/Hers hair is long.

- 10. Form questions using the superlative form of the adjectives:** (1x4=4)

Marks)

- a) What/is/good/website on the internet
b) Who/is/young/person in your family
c) Which/class/is/noisy/in our school
d) Which/is/difficult/subject/at school

- 11. Write the positive and question form of the following sentence.** (1x2=2)

- a) He doesn't do his homework.
b) They watch TV every evening.

Section C- Literature

- 12. Write 'T' for TRUE and 'F' for FALSE statement.** (1X5=5)

- a) Bhasuraka jumped into the well.
b) The City Mouse took his cousin to an alley.
c) The merchant's friend was kind-hearted and honest.
d) Father William was young but old in mind.
e) The Rats and the Gold is a poem.

- 13. Fill in the Blanks with the words from the text.** (1X5=5)

- a) Bobo breathed a sigh of relief because _____.
b) The City Mouse was disappointed with the meal as _____.
c) The merchant's friend was feeling ashamed as _____.
d) Father William's hair has become very white as _____.
e) To the friend, pleasant surprise was _____.

- 14. Answer the Questions in full sentence.** (1+2+2=5)

- a) Why were all the animals in the forest worried?
b) What news did the friend give to the merchant when he returned from his journey?
c) How does the older man react to the younger man's criticism?



Delhi Public School, Rampurhat

MID - TERM EXAMINATION

SESSION: 2024-2025

SUBJECT: BENGALI (2nd Language)

CLASS - III

Time Allowed: 2 Hours 15 Mins

Max. Marks: 50

- (i) প্রথম 15 মিনিট শুধুমাত্র প্রশ্নপত্র পড়ার জন্য অনুমোদিত। এই সময়ে ছাত্রছাত্রীরা লেখা শুরু করবে না।
(ii) এই প্রশ্নপত্রটি দুটি মুদ্রিত পৃষ্ঠা নিয়ে গঠিত।

বিভাগ ক - নির্মিতি

- 1) অনুচ্ছেদ লেখো। (5×1=5)
ক) জাতীয় পতাকা
অথবা
খ) জল

বিভাগ খ - ব্যাকরণ

- 2) সঠিক উত্তরটি বেছে নিয়ে লেখো। (1×10=10)
ক) লিঙ্গ কথার অর্থ হল - (চিহ্ন / বাক্য / ভাষা)।
খ) ক্লীবলিঙ্গ দ্বারা বোঝানো হয় - (স্ত্রীকে / পুরুষকে / জড় পদার্থকে)।
গ) 'বর্গমালা' শব্দটি হল - (একবচন / বহুবচন / কোনোটাই নয়)।
ঘ) 'এটি' শব্দটি হল একবচন - (কথাটি ঠিক / কথাটি ভুল / কথাটি কিছুটা ভুল)।
ঙ) 'দিন' শব্দের পদ পরিবর্তন করলে হবে - (দৈনিক / দীনতা / কোনোটাই নয়)।
চ) 'ক্' - এর উচ্চারণ স্থান হল - (তালু / কণ্ঠ / ওষ্ঠ)।
ছ) একটি ত্রুস্বস্বর হল - (ঈ / উ / অ)।
জ) উভয়লিঙ্গ শব্দগুলি সবসময়ই প্রাণীবাচক - (কথাটি ঠিক / কথাটি ভুল / কথাটি কিছুটা ভুল)।
ঝ) ঐ হল একটি - (মৌলিক স্বর / যৌগিক স্বর / কোনোটাই নয়)।
ঞ) 'ঘুম' শব্দের পদ পরিবর্তন করলে হবে - (ঘুমিয়ে / ঘুমাচ্ছে / ঘুমন্ত)।
- 3) একটি বাক্যে উত্তর লেখো। (1×10=10)
ক) 'সে' শব্দের বহুবচন কী হবে ?
খ) 'অলস' শব্দের পদ পরিবর্তন করলে কী হবে ?
গ) ক্লীবলিঙ্গের একটি উদাহরণ দাও।
ঘ) উভয়লিঙ্গের একটি উদাহরণ দাও।

- ঙ) একটি দীর্ঘস্বরের উদাহরণ দাও ।
 চ) 'সূর্য অস্ত যাচ্ছে' এখানে 'সূর্য' শব্দটি কোন্ বচন ?
 ছ) 'ভগিনী' শব্দের পুংলিঙ্গের রূপটি কী ?
 জ) 'বোকা' শব্দের পদ পরিবর্তন করলে কী হবে ?
 ঝ) কোন্ কোন্ পদের বচন হয় ?
 ঞ) বাংলায় কয়টি মূল স্বরধ্বনি আছে ?

বিভাগ গ - সাহিত্য

4) সঠিক উত্তরটি বেছে নিয়ে লেখো ।

(1×10=10)

- ক) খোকা পঞ্জিকাতে দেখছে - (হাসির / মজার / ছুটির) খবর ।
 খ) শিশুটি নৌকা ছেড়ে দেবে (ভোর / সকাল / সন্ধ্যা) বেলা ।
 গ) কামড়াল কী - (ছারপোকাতে / মশাতে / কুকুরে) ।
 ঘ) রাম বনে গিয়েছিলেন (দশ / এগারো / চোদ্দো) বছরের জন্য ।
 ঙ) সবার প্রশ্ন শুনে খোকাকার কান্না - (বেড়ে গেল / কমে গেল / থেমে গেল) ।
 চ) রাজকন্যার ঘুমন্ত পুরীর দেউরিতে পাহারা দিচ্ছে - (রক্ষী / রাক্ষস / পর্বত) ।
 ছ) বিদ্যাসাগর নামটি রেখেছিলেন (পিতামহ / শিক্ষকমশাইরা / বন্ধুরা) ।
 জ) শিশুটি নৌকায় পাল তুলে দেবে (একটা - দুটো / চারটে - পাঁচটা - ছয়টা / নয়টা - দশটা) ।
 ঝ) সুইটজারল্যান্ড হল (ভারতের / চীনের / ইউরোপের) মধ্যপ্রদেশ ।
 ঞ) মাইল মানে - (আধ ক্রোশ / এক ক্রোশ / দুই ক্রোশ) ।

5) একটি বাক্যে উত্তর লেখো ।

(1×10=10)

- ক) বিদ্যাসাগরের শখের খেলা কী ছিল ?
 খ) সূর্যের আলো কীসের উপর পড়ে সাত রঙে বিভক্ত হয়ে যায় ?
 গ) শিশুটি নৌকায় কটি দাঁড় এঁটে দিতে চায় ?
 ঘ) দুপুরবেলা শিশুটির মা কোথায় থাকবেন ?
 ঙ) পর্বতের পাগড়িতে কী জ্বলছে ?
 চ) সমস্ত সুইটজারল্যান্ড জুড়ে কোন্ পর্বত আছে ?
 ছ) দেশের নতুন শিক্ষার কেন্দ্র কোনটি ?
 জ) ঠাকুরদাস কত মাইনেতে চাকরি শুরু করেন ?
 ঝ) খোকাকার অশ্রু কীভাবে ঝরছিল ?
 ঞ) কান্নাধারা কেমনভাবে উথলে উঠল ?

6) নীচের প্রশ্নগুলির উত্তর লেখো ।

(1×5=5)

- ক) 'বরফের দেশে' গল্পে সূর্য ও চাঁদের আলো বরফের উপর পড়লে কেমন লাগে ? আঁধার রাতে চারপাশ কেমন দেখায় ? ওখানে ঘর কীভাবে বন্ধ রাখতে হয় ?

(3+1+1=5)

অথবা

খ) 'ছুটির খবর' কবিতায় পঞ্জিকাতে কোন্ কোন্ উৎসবের উল্লেখ আছে ? পঞ্জিকা দেখতে দেখতে খোঁকা কী করছিল? কোন্ ছুটি কীভাবে নষ্ট হল ?
(2+1+2=5)



DELHI PUBLIC SCHOOL RAMPURHAT

MID-TERM EXAMINATION

SESSION: 2024-2025

SUBJECT: HINDI

CLASS – III

Time Allowed: 2 Hrs 15 Mins

Max. Marks: 50

सभी प्रश्नों के उत्तर देना अनिवार्य है।

लिखावट साफ सुथरी होनी चाहिए।

1-अतिरिक्त 15 मिनट का समय सिर्फ प्रश्न पत्र को ध्यानपूर्वक पढ़ने के लिए दिया है।

2-इस प्रश्नों को दो खंडों में में विभक्त किया गया है।

खंड-क

1 निम्नलिखित दीर्घ प्रश्नों के उत्तर लिखिए:

(2x10=20)

- (क) बादशाह ने किसकी प्रशंसा की ?
- (ख) ब्राह्मण ने कहां फ़रियाद लगाई ?
- (ग) बाज़ार जाते वक्त घर से थैला क्यों ले जाना चाहिए ?
- (घ) कूड़ा कूड़े घर के बाहर क्यों पड़ा था ?
- (ङ) पूजा के लिए कौन-कौन से फूलों का प्रयोग किया जाता है ?
- (च) गुलाब से क्या-क्या बनता है ?
- (छ) सर जगदीश चंद्र बसु ने हमें पेड़ पौधों के बारे में क्या-क्या बताया ?
- (ज) कौन सा फूल गोल गेंद जैसा होता है?
- (झ) नौका दौड़ का सबसे बड़ा आकर्षण क्या है ?
- (क) विजेता ने नाविकों को दी जाने वाली ट्रॉफी कैसी होती है ?

2 निम्नलिखित रिक्त स्थानों की पूर्ति कीजिए :

(1x5=5)

- (क) केंचुए कूड़े को पूरी तरह गला कर बहुत ही अच्छी _____ बनाते हैं।
- (ख) हरसिंगार रात में खिलता, सुबह _____ से भर जाता।
- (ग) मानव की तरह _____ को भी झटका या आघात लगता है।
- (घ) जगदीश चंद्र बसु से सभी वैज्ञानिकों ने _____ मांगी।
- (ङ) ट्रॉफी पर नेहरू जी के _____ भी थे।

3 निम्नलिखित लघु प्रश्नों के उत्तर लिखिए :

(1x5=5)

- (क) ब्राह्मण ने किसान से क्या खरीदा ?
(ख) कागज का इस्तेमाल कैसे करना चाहिए ?
(ग) फूलों का राजा किसे बताया गया है ?
(घ) सर जगदीश चंद्र बसु कौन थे ?
(ङ) नौका दौड़ का क्या नाम था ?

खंड - ख

4 निम्नलिखित प्रश्नों के उत्तर लिखिए:

(1x5=5)

- (क) किस स्वर की कोई मात्रा नहीं होती ?
(ख) निरर्थक शब्द किसे कहते हैं ?
(ग) जातिवाचक संज्ञा किसे कहते हैं ?
(घ) विधेय किसे कहते हैं ?
(ङ) स्त्रीलिंग किसे कहते हैं ?

5 निम्नलिखित रिक्त स्थानों की पूर्ति कीजिए:

(1x5=5)

- (क) वाक्य के _____ भेद होते हैं।
(ख) जिन शब्दों का कोई अर्थ नहीं होता है, वे कहलाते हैं _____ शब्द।
(ग) _____ स्वर की कोई मात्रा नहीं होती है।
(घ) लिंग के दो भेद होते हैं, पुलिंग और _____।
(ङ) संज्ञा के _____ भेद होते हैं।

6 निम्नलिखित पुल्लिंग शब्दों को स्त्रीलिंग में लिखिए:

(1x5=5)

पुल्लिंग

स्त्रीलिंग

- 1 लड़का -
- 2 भाई
- 3 मुरगा-
- 4 सेवक-
- 5 पड़ोसी -
- 6 घोड़ा -
- 7 मोर -
- 8 सेठ -

6 " पर्यावरण " विषय पर निबंध लिखिए।

(1x5=5)



DELHI PUBLIC SCHOOL RAMPURHAT

MID-TERM EXAMINATION

SESSION: 2024-2025

SUBJECT: MATHEMATICS

CLASS – III

Time Allowed: 2 Hrs 15 Min

Max. Marks: 50

General Instructions:

- (i) First 15 minutes are allowed only for reading the question paper. Students must NOT start writing during this time.
- (ii) This question paper consists of 2 printed pages.

Answer the problems.

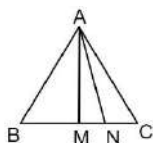
(1×10=10)

1. Continue the pattern. A A B A A C A A _____.
2. $85 - 40 =$ _____.
3. $3100 +$ _____ $= 3500$
4. LX Roman Numerals in words is _____.
5. $5 \times 0 =$ _____. **OR** $11 \times 0 =$ _____.
6. Even + odd = _____.
7. I have _____ corner and _____ side. I am a circle.
8. $60 \div 10 =$ _____. Quotient = _____ Remainder = _____
9. What is 1 more than 999? _____
10. 60×8 $40 + 380$ (Write the correct symbol $<$, $>$ or $=$)

Answer the following.

(2×10=20)

11. $206 \times 7 =$ _____ **OR** $183 \times 3 =$ _____
12. How many triangles are there in the given figure?



13. 100, 90, _____, _____, 60. (Complete the number pattern)
14. $1394 + 1702 + 446 =$ _____

OR $4679 + 1320 + 888 =$ _____

15. Predecessor

Successor

_____ three thousand three _____

16. Arrange in descending order. 7430, 6540, 6397, 7842

17. What shape will you get when many same sized bangles are placed one on other?
Sphere or Cylinder?

18. 5789

- 3235

19. $143 \times 46 =$

OR,

$253 \times 22 =$

20. Divide 9112 by 8. **OR** Divide 5110 by 5.

Solve the following word problems.

(3×4=12)

21. There are 5860 people who travelled in a train with 5 bogies. How many people were there in each bogie?

OR

A train carries 794 passengers in one bogie. How many passengers are there in 12 bogies?

22. A shopkeeper had 1074 eggs in his shop. One crate with 768 eggs fell, breaking the eggs. How many eggs remain with the shopkeeper?

23. Caran's farm grew 3875 mangoes last year. Her farm grew 1028 this year. How many mangoes did she grow in both years?


24. 4820 fans came to watch the cricket match on Saturday and 4090 fans came to the stadium on Sunday. What was the total number of fans that came on both days?

Solve the following.

(4×2=8)

25. A _____ has

- 6 faces
- _____ edges
- _____ corners.



(2+1+1)

26. There are 3428 travellers at a bus stand. Each mini bus can carry 12 people. How many such buses are needed? How many travellers get left behind? **(2+2)**



DELHI PUBLIC SCHOOL RAMPURHAT

MID-TERM EXAMINATION

SESSION: 2024-2025

SUBJECT- EVS

CLASS – III

Time Allowed: 2 Hrs 15 Mins

Max. Marks: 50

General Instructions:

- (i) First 15 minutes are allowed only for reading the question paper. Students must NOT start writing during this time.
- (ii) This question paper consists of 2 printed pages.

TRUE AND FALSE:

(1x6=6)

- Q1. There are six continents in the world
- Q2. Dams and tanks are not used to store water
- Q3. Newspaper is not a means of mass communication
- Q4. Maps are drawn on round surfaces
- Q5. The states have a governor
- Q6. Early humans wandered from place to place

MULTIPLE CHOICE QUESTIONS:

(1x6=6)

- Q7. A group of stars which form a pattern in the sky is called a _____
a) galaxy b) constellation c) comet
- Q8. Animals and early humans were afraid of _____
a) Water b) fire c) fruits
- Q9. _____ is a vehicle that does not run on fuel
a) Truck b) Bike c) Bicycle
- Q10. There _____ intermediate directions
a) four b) five c) eight
- Q11. Electricity generated using water energy is called _____
a) thermal electricity b) hydroelectricity c) green electricity
- Q12. People who makes maps are known as _____
a) geographers b) explorers c) cartographers

FILL IN THE BLANKS:

(1x6=6)

- Q13. Planets move around the sun in a specific way known as _____
- Q14. Water that we get from seas, oceans, lakes and rivers is in _____ form
- Q15. A _____ is a means of mass communication
- Q16. A book of maps is called _____
- Q17. All important discussion about the country is held in this building _____
- Q18. The early humans took shelter in _____

VERY SHORT ANSWER TYPE QUESTIONS:

(1x6=6)

- Q19. What did early humans eat?
Q20. What is a sketch?
Q21. Name three states of water.
Q22. What is a planet?
Q23. List one way in which you can help your classmate.
Q24. What is a map?

SHORT ANSWER TYPE QUESTIONS:

(2x8=16)

- Q25. What do you mean by Earth has the right temperature?
Q26. What is rain water harvesting?
Q27. How do letters reach us?
Q28. Define a scale in a map
Q29. Name the intermediate directions.
Q30. Name the neighbouring countries of India.
Q31. Why did the early humans begin to stay in one place? How did they learn farming?
Q32. What is the fastest means of transport? Mention some essential need of it.

LONG ANSWER TYPE QUESTIONS:

(3x2=6)

- Q33. Define a water cycle
Q34. Mention 3 important uses of fire.

MAP:

(1x4=4)

Q35. On an outline political map of India, mention the following:

- a) A union territory of India.
- b) The capital of India.
- c) A state in the southern part of India.
- d) A neighbouring country of India.



DELHI PUBLIC SCHOOL RAMPURHAT

MID-TERM EXAMINATION

SESSION: 2024-2025

SUBJECT: CPMPUTER SCIENCE

CLASS – III

Time Allowed: 2 Hrs 15 Mins

Max. Marks: 50

General Instructions:

- (i) First 15 minutes are allowed only for reading the question paper. Students must NOT start writing during this time.
- (ii) This question paper consists of 2 printed pages.

GROUP-A

A. Fill in the blanks:

(1X5 =5)

- 1) A Joystick is a _____ device used for playing games.
- 2) An _____ is a bridge between us and the computer system.
- 3) _____ is a worldwide network of computers which allows the sharing of information.
- 4) _____ can hold text, pictures, songs, videos, and much more.
- 5) _____ is a shape that is used to write a message.

B. Tick (✓) the Correct option:

(1X5 = 5)

- 6) What does the start menu Contain?
a) All apps present on the computer b) Only calculator c) Start button only d) wallpaper
- 7) What are the responsibilities of a good digital citizen?
a) Sharing password b) Arguing with online friends
c) Being kind and respectful online d) Disrespecting people online.
- 8) How are files organized on a computer?
a) In Tiffin boxes b) Inside folders c) In the trash bin d) In a file
- 9) Which one of the following tools in Paint is used for spraying and drawing with colors?
a) Pencil b) star c) Airbrush d) Eraser
- 10) Which type of software is responsible for managing computer input and output?
a) System software b) Application Software c) Hardware d) internet browser

C. Write T for True and F for False:

(1X5 = 5)

- 11) There are four components of CPU.
- 12) Sorting icons means arranging them in a specific order.
- 13) A folder is a container that store files.
- 14) Callout is a shape that is used for calling messages.
- 15) Software is that part of a computer that can be touched.

D. Match the Pattern:

(1X5 = 5)

A

B

- | | |
|---|-------------------------------------|
| 16) Joystick | a) Web sites |
| 17) Pen drive | b) To change the desktop background |
| 18) A collection of web pages | c) Input Device |
| 19) Personalize | d) Internet |
| 20) The network spread across the world | e) Storage Device |

GROUP-B (Short Answer Type Questions)

(2X9=18)

- 21) What are the uses of the Color Picker tool in MS Paint?
- 22) What is the use of Taskbar?
- 23) Briefly describe each type of user interface.
- 24) What is sorting icons?
- 25) Write any one way to open a file.
- 26) Why do we save a file?
- 27) Write the uses of color picker in Paint.
- 28) Write the uses of supercomputers.
- 29) What happens when we spend a lot of time on the internet?


GROUP-C (Long Answer Type Questions)

(3X4=12)

- 30) Define software. What are its types?
- 31) How do you create a folder on a computer?
- 32) Write three online safety rules on internet.
- 33) How do we save a file?

OR

Briefly describe each component of Paint Window.



DELHI PUBLIC SCHOOL RAMPURHAT

MID-TERM EXAMINATION

SESSION: 2024-2025

SUBJECT: GENERAL KNOWLEDGE

CLASS – III

Name: _____ Sec: _____ Roll No: _____

Invigilator's Sign:

Examiner's Sign:

Time Allowed: 45 Mins

Max. Marks: 25

SECTION-A

1. Tick (✓) the correct answers:

(1X10=10)

1. This is the largest big cat:

a. Royal Bengal Tiger b. Siberian Tiger

2. Howler monkeys are the loudest of all monkeys.

a. true b. false

3. Which is a dog's strongest sense?

a. taste b. smell

4. It has prickly spines for protection:

a. hedgehog b. armadillo

5. Chipmunks are a part of which family?

a. monkey b. squirrel

6. Your water bottle is half full. You would:

a. Throw away the water b. Sprinkle water on your classmates

c. Water a plant with the remaining water

7. You need to carry your Environment Scrapbook to school. You would:

a. Use a polythene bag b. Use a cloth bag c. Make a paper bag using old newspaper

8. You make a mistake while solving sums at home. You would:

a. Tear the paper and throw it on the floor

b. Tear the paper and start working on a new sheet of paper

c. Erase the mistake and carry on

9. This is how you carry lunch to school:

- a. Sandwiches wrapped in aluminum foil that you throw away
 - b. Sandwiches wrapped in aluminum foil that you would recycle
 - c. Sandwiches packed in disposable plastic packs
10. You buy new clothes:
- a. When you really need some
 - b. Whenever you are out shopping
 - c. When you see a friend wearing something new

SECTION-B

2. Write 'T' for true or 'F' for false:

(1X6=6)

- 1. The solar system has eight planets including Earth -
- 2. Sushi is a special food from Italy -
- 3. The Chinese New Year is celebrated as Halloween -
- 4. Roughage helps in the proper digestion of food -
- 5. Ankle is the joint where the leg and the foot meet -
- 6. The beautiful monument Taj Mahal is made of marble –

3. Answer the following:

(1X9=9)

1. What do spiders produce to make their webs?

Ans:

2. How many kidneys does the human body have?

Ans:

3. By what other name is football known as?

Ans:

4. Which is the fastest growing plant?

Ans:

5. What is the value of the Roman Numeral IX?

Ans:

6. Which country's traditional dress are you wearing if you are wearing a Kimono?

Ans:

7. Bihu is a popular folk dance from which Indian state?

Ans:

8. Who was the first woman Prime Minister of India?

Ans:

9. Whom do we call Netaji?

Ans: